

**2017****Class****National Achievement Survey****3****Achievement Test**

Test Form No.


**3 2**

Medium of Instruction \_\_\_\_\_

**English**

&lt;&lt; TO BE FILLED IN BY FIELD INVESTIGATOR &gt;&gt;

UDISE School Code		<input type="text"/>									
Student's ID		Student's Aadhaar Number									
<input type="text"/>		<input type="text"/>									
Area Code		Section		Social Group		CWSN					
1 Rural <input type="checkbox"/>		<input type="checkbox"/>		1 SC		1 LD					
2 Urban <input type="checkbox"/>				2 ST <input type="checkbox"/>		2 VI					
School Management		Student's Gender		3 OBC <input type="checkbox"/>		3 HI <input type="checkbox"/>					
1 Govt. <input type="checkbox"/>		1 Boy <input type="checkbox"/>		4 General		4 S&LD <input type="checkbox"/>					
2 Govt.-aided <input type="checkbox"/>		2 Girl <input type="checkbox"/>				5 ID					
						6 OthD					
CWSN : LD- Locomotor Disability; VI-Visual Impairment; HI- Hearing Impairment; S&LD- Speech & Language Disability; ID- Intellectual Disability; OthD- Other Disabilities											
Student's name		<input type="text"/>									
School's name		<input type="text"/>									
District		<input type="text"/>									
State		<input type="text"/>									

Government of India  
Ministry of Human Resource Developmentविद्यया ऽ मृतमश्नुते  
एन सी ई आर टी  
NCERTराष्ट्रीय शैक्षिक अनुसंधान और प्रशिक्षण परिषद्  
NATIONAL COUNCIL OF EDUCATIONAL RESEARCH AND TRAINING  
Sri Aurobindo Marg, New Delhi 110 016  
Visit us at : <http://www.ncert.nic.in>सर्व शिक्षा अभियान  
सब पढ़ें सब बढ़ें

**Instructions for the Field Investigator**  
**(READ these instructions CAREFULLY before beginning the test)**

- Write UDISE School Code, Student's ID, Student's Aadhaar Number, Area Code (Rural-1, Urban-2), School Management (Govt.-1, Govt. aided-2), Student's Gender (Boy-1, Girl-2), Social Group (SC-1, ST-2, OBC-3, General-4), CWSN : LD (Locomotor Disability) – 1; VI (Visual Impairment) – 2; HI (Hearing Impairment) – 3; S&LD (Speech & Language Disability) – 4; ID (Intellectual Disability) – 5; OthD (Other Disabilities) – 6; Student's Name, School's Name, District and State.
- Divide the total number of selected students into **two** groups.
- One test form should be distributed to one group of students.
- **Complete all the entries on the first page before distribution of the test booklet** taking help from the school register/class teacher.
- All entries are mandatory and should be in English only. Write all codes in international numerals, i.e., 1, 2, 3...
- Ensure that all the children are seated comfortably in their respective places.
- Ask the children to take out their pencils and erasers and keep them ready.
- Distribute the test booklet to the children. Tell the children not to open their booklets till it is told to do so.
- Give the following directions to the children **"Find the answer to the question from the options given.**

**Circle the correct option.**

- Do the following example on the board and explain how to mark the answer.

<b>Q. Given the numbers 36, 28, 41 and 59 which is the largest?</b>	
A	36
B	28
<input checked="" type="radio"/> C	59
D	41

- The field investigator should tell the children that they should **Circle only one option as correct.**
- Give the following **Directions to the children, "Look at Question No.1, all of you read silently the given passage."**

**LANGUAGE TEST (Q1 to Q15)**

- The field investigator should facilitate the progress of the child from one question to the next.
- Ask the children to **read silently** the given passage, advertisement, poster or the calendar.
- The field investigator **should not** read these passages aloud.
- When the children have finished reading, only then read out questions one by one along with their options.
- Ask them to circle the correct option for each question.
- The field investigator should not hurry with the test.

**ENVIRONMENTAL STUDIES (Q16 to Q30) AND MATHEMATICS (Q31 to Q45) TEST**

- Give the following directions to the children **"Find the answer to the question from the options given. Circle the correct answer.**
- Give the following **Directions to the children, "I will read it aloud. All of you will read silently along with me."**

- **Read aloud slowly the first question, so that the children are able to understand. If needed repeat the question but ONLY ONCE.**

- Each question should take approximately **20-30 Seconds to read aloud.**
- Give the following directions to the children, **"Now mark the correct option in your booklet"**.
- Let the child answer the question on his/her own.
- **Wait for approximately 45 Seconds**, for the children to understand the question and record the answer before proceeding to the next question.
- DO NOT help or give any clue to children in finding out the answer to the questions.
- Give the following directions to the children, **"Now you will do the next question. Pay attention to the next question."**
- It should take **approximately 2 minutes** for completing each question by following the above guidelines.
- Follow the same procedure for the entire questions one after the other till the end.
- The entire procedure should take approximately **90 minutes** to complete.
- After the completion of the test, collect all the test booklets from the children.
- Arrange the booklets in the increasing order of Student ID.
- Ensure the number of booklets distributed to the children, match with the number of children.

**Part 1- Read the story given below:****No One Plays With Me**

There was still time for the school to get over. All the children were playing. A boy named Raju also went to play with them. But, no one played with him. He felt bad about it. In a short while the bell rang. All the children went home. Raju also came home. He did not feel like doing anything. His mother asked him, “Why are you so sad?” He said, “No one plays with me mummy.” Mother said, “Don’t be sad. Tomorrow, ask your friends to let you play with them.” Next day, Raju went to school and told his friends, “I also want to play with all of you.” His friends held his hands and took him to the playground. He also started playing with them. He was very happy that day.

**Encircle the correct option to answer questions.**

**1 With whom the children were NOT playing?**

- A) Doll
- B) Raju
- C) Mother
- D) Chunmun

**2 When did the children go home?**

- A) When their mother called.
- B) After the school bell rang.
- C) After their game was over.
- D) When their friends asked them to come.

**Choose the correct option to fill in the blank.**

**3 Mother \_\_\_\_\_ Raju after listening to his problem.**

- A) punished
- B) advised
- C) loved
- D) praised

**4 Why did Raju's friends hold his hands and take him along?**

- A) To play with him
- B) To send him away from the school
- C) To make him study
- D) To take him to the teacher

- 5 He was very happy that day.
- In the above sentence, what is the opposite of the underlined word?
- A) dull
  - B) glad
  - C) angry
  - D) sad

**Part 2: Read the story given below:**

### **The Thirsty Sparrow**

A sparrow was very thirsty. She saw a tap near a wall. She went near the tap. But there was no water in it. The sparrow started searching for water. There was no trace of water anywhere. She was tired. So she sat on a branch of a tree. Suddenly she saw a girl holding a pot full of water in her hand. She poured water into a bowl kept under the tree. At once the sparrow flew down and drank the water.

**Encircle the correct option in the following questions.**

**6 What is this story about?**

- A) A girl
- B) A crow
- C) A sparrow
- D) A squirrel

**7 After searching for water, where did the tired sparrow sit?**

- A) On a mug
- B) On the wall
- C) On a tap
- D) On the branch of a tree



**8 What was the sparrow searching for?**

- A) food
- B) water
- C) a girl
- D) a mug

**9 The sparrow saw \_\_\_\_\_ near a wall.**

- A) a tree
- B) a tap
- C) a pot
- D) a bowl

**10 The girl poured water into a bowl kept under the \_\_\_\_\_.**

- A) tree
- B) plant
- C) tap
- D) roof

**Part 3- Look at the calendar below.**

<b>JANUARY</b>							<b>2017</b>
<b>SUNDAY</b>	<b>MONDAY</b>	<b>TUESDAY</b>	<b>WEDNESDAY</b>	<b>THURSDAY</b>	<b>FRIDAY</b>	<b>SATURDAY</b>	
<b>1</b> NEW YEAR	<b>2</b>	<b>3</b>	<b>4</b>	<b>5</b>	<b>6</b>	<b>7</b>	
<b>8</b>	<b>9</b>	<b>10</b>	<b>11</b>	<b>12</b>	<b>13</b> LOHRI	<b>14</b> PONGAL	
<b>15</b>	<b>16</b>	<b>17</b>	<b>18</b>	<b>19</b>	<b>20</b>	<b>21</b>	
<b>22</b>	<b>23</b>	<b>24</b>	<b>25</b>	<b>26</b> REPUBLIC DAY	<b>27</b>	<b>28</b>	
<b>29</b>	<b>30</b>	<b>31</b>					

**Encircle the correct option.**

**11 What was on 14<sup>th</sup> January?**

- A) Pongal
- B) Republic day
- C) Lohri
- D) New Year

**12 How many Sundays were there in January 2017?**

- A) Three
- B) Four
- C) Five
- D) Six

**13 On which date does the last Friday of January, 2017 fall?**

- A) 6
- B) 27
- C) 28
- D) 31


**14 On which day was Lohri?**

- A) Tuesday
- B) Wednesday
- C) Thursday
- D) Friday

**15 The Sunday just after Lohri falls on which date?**

- A) 8<sup>th</sup>
- B) 14<sup>th</sup>
- C) 15<sup>th</sup>
- D) 22<sup>nd</sup>

- 16** You see a frog. You see a stone.  
You go near them and clap.  
The frog jumps, but the stone does not.  
What does this show?



- A) Stone is a living thing and the frog is a non-living thing
- B) Stone is a non-living thing and frog is a living thing
- C) Both frog and stone are non-living things
- D) Both frog and stone are living things
- 17** What will be the best use of water left in your bottle after school?
- A) Throw it anywhere
- B) Throw it on your friend
- C) Play with it
- D) Use it for watering a plant

**18 Which of the following food items should you eat to be healthy?**

- A) Cakes and biscuits
- B) Fried things such as chips
- C) Milk and fruits
- D) Sweets

**19 While walking on the road, you see the following traffic sign.**



**What does this sign say?**

- A) School ahead
- B) Hospital ahead
- C) Park ahead
- D) Playground ahead

20 Look at the picture given below.



**What is the activity being done here?**

- A) Making metal pots
- B) Making earthen pots
- C) Making bags
- D) Making wheels

**21      “My mother gave birth to a baby this month, now I have a baby sister!” How does my family change?**

- A) My family is now bigger
- B) My family is now smaller
- C) There is no change
- D) I love my sister


**22      A metal plate is used to cover a pot of boiling water. What change will you see in the plate?**

- A) Plate will become hot.
- B) Plate will become cold.
- C) There will be no change.
- D) Plate will break.




- 23 You have to write about 5 current events around the world. Which of the following will give you the information?

A)



Letter

B)



Textbook

C)



Story Book

D)



Newspaper





24 The animals are arranged in the order of their size, from small to big.

Which is the correct order?

- A) Dog, Elephant, Lion
- B) Horse, Elephant, Rat
- C) Squirrel, Lion, Elephant
- D) Cat, Cow, Dog


25 Look at the pictures. The same amount of water is put in the glasses and in the bowls. Two are left in the Sun and the other two in the shade.

After a few hours which glass or bowl will lose most of the water?

- A) 
- B) 
- C) 
- D) 

**26 In a dart game, following is the score of 4 players.**

<b>Player</b>	<b>Score</b>
<b>Rashmi</b>	<b>0</b>
<b>Rakesh</b>	<b>50</b>
<b>Soha</b>	<b>150</b>
<b>Rehman</b>	<b>100</b>



**Centre of the dart board is called the Bull's eye. Hitting the Bull's eye gives a score of 50. Hitting anywhere else gives you a zero. Which of the following pair of players did hit a bull's eye?**

- A) Rashmi and Rakesh
- B) Rehman and Rashmi
- C) Soha and Rashmi
- D) Rakesh and Soha

**27 If your father's wallet is stolen in the market, where will you go for help?**

- A) Police Station
- B) Hospital
- C) Bank
- D) School

**28 Which of the following pairs of animals hop?**

- A) Horse, Camel
- B) Cat, Goat
- C) Elephant, Dog
- D) Rabbit, Kangaroo

**29 You are traveling by bus. Suddenly the bus driver sees the red signal on the traffic light.**



**What should the driver do?**

- A) Keep moving
  - B) Stop the bus
  - C) Start moving faster
  - D) Start moving slower
- 30 A one month old baby is there in the family. What is the main food that the baby should have?**
- A) Roti and dal
  - B) Fruits only
  - C) Vegetable soup
  - D) Mother's milk

31 Your school starts at 8'O clock. Out of the following which clock shows this time?

A)



B)



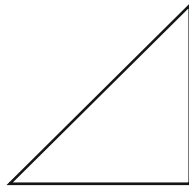
C)



D)



32 How will you cut the paper below to obtain this

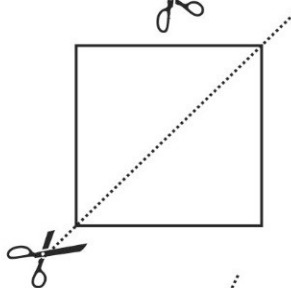


shape?

A)



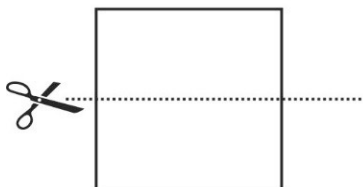
B)




C)



D)



- 33 Which number operation shows the total number of flowers?



- A)  $6 + 3$
- B)  $6 \times 3$
- C)  $6 \times 6$
- D)  $6 \div 3$

34 Which house number is three hundred ninety six?





**35 The chart below shows the number of people who visited the library on different days.**



**On which day did the most number of people visit the library?**

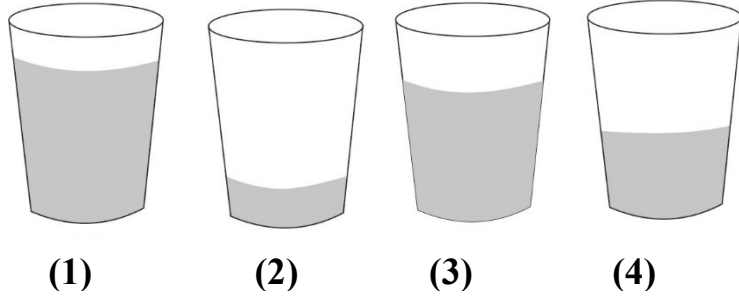
- A) Thursday
- B) Friday
- C) Monday
- D) Tuesday

36 You have ₹3. Which two things can you buy with this money?

Things	Price
Paper clips	₹4
Ball pen	₹2
Pencil	₹1
Ruler	₹3

- A) Paper clips and Ball pen
- B) Paper clips and Pencil
- C) Pencil and Ruler
- D) Ball pen and Pencil

**37** Which sequence will give you the glasses filled with water in increasing order?



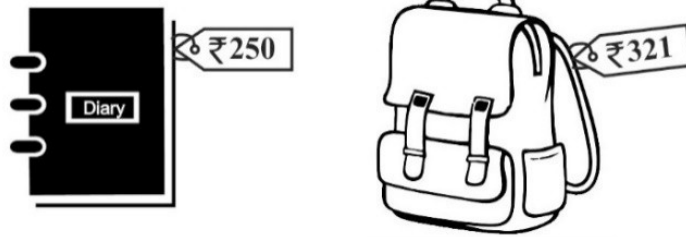
A) 2, 4, 3, 1

B) 1, 2, 3, 4

C) 2, 1, 4, 3

D) 4, 3, 2, 1

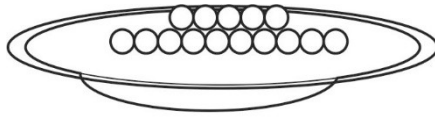
38



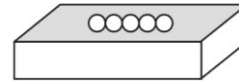
What is the total cost of the diary and the bag in the above figure?

- A) ₹250
- B) ₹321
- C) ₹570
- D) ₹571

39





A tray of 15 laddoos





5 laddoos in each

**There are 15 laddoos in a tray. If we can put 5 laddoos in a box, then how many boxes are needed to fill all the laddoos?**


A)  (one box)

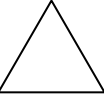
B)  (two boxes)


C)  (three boxes)

D)  (five boxes)

**40 Which of the figure given below is a circle?**

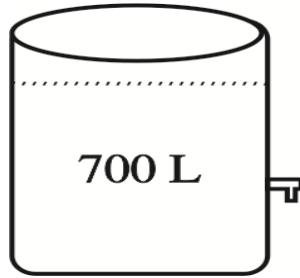
A) 

B) 

C) 

D) 

41 A tank has 700 L of water.


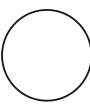

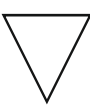


Some water was used. Now 275 L of water is remaining.  
How much water was used?

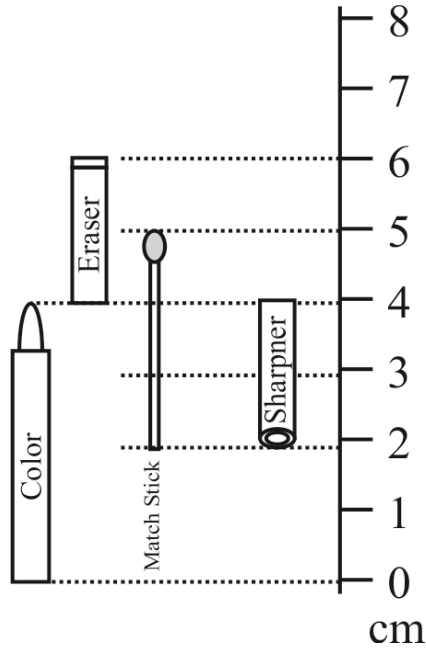
- A) 275 L
- B) 425 L
- C) 575 L
- D) 975 L





42 What comes next in the following pattern?



- A) 
- B) 
- C) 
- D) 

43 Which object is 3 cm long?



- A) 
- B) 
- C) 
- D) 

44 What comes next?

12, 16, 20, 24, \_\_\_\_\_, \_\_\_\_\_.

A) 28, 34

B) 25, 26

C) 32, 40

D) 28, 32

45 Cost of 1 pencil (  ) is ₹ 5

Cost of 4 such pencils (     ) will be ₹ .....

A) ₹ 9

B) ₹ 20

C) ₹ 54

D) ₹ 5