

Environmental Studies

Worksheets

(Based on Learning Outcomes)

Class-3



स्वाध्यायान्मा प्रमदः

State Council of Educational Research and Training

Varun Marg, Defence Colony, New Delhi-110024

PREFACE

The National Policy on Education 2020 suggests for an increased focus on foundational literacy and numeracy with special focus on reading, writing, speaking, counting, arithmetic, and mathematical thinking throughout the preparatory and middle school education. It also suggests for a robust system of continuous, formative/adaptive assessment to track individualized learning and academic progress.

The academic loss due to Covid -19 pandemic has created a huge learning deficit and students are lagging behind in terms of learning outcomes. Learning Outcomes serve as benchmark for students' achievement in each class and subject. The Learning Outcomes for each class in Languages (Hindi, English and Urdu), Mathematics, Environmental Studies, Science and Social Science up to the elementary stage (Class 1 to 8) have been developed by NCERT and adapted by SCERT Delhi.

To bridge the learning gaps caused by the pandemic and to improve learning levels of students, SCERT Delhi has developed worksheets based on learning outcomes for class 3, 5 and 8. The worksheets for classes 3 and 5 have been developed for subjects: Mathematics, Environmental Studies and Languages (Hindi & English) and for class 8 Science, Mathematics, Social Science and Languages (Hindi & English). Each subject has 10 worksheets with 15 MCQs for each worksheet.

These worksheets are provided for practice purpose to improve the competencies of students. These are exemplar and teachers can frame similar worksheets/questions for practice. Guidelines for teachers are also there in each subject booklet to help teachers get better understanding of objectives and content of the worksheets.

It gives me immense pleasure to hand over these worksheets to teachers, our nation builders who are striving and working hard to impart quality education to students. We all as stakeholders need to work collectively to facilitate our students to attain higher order competencies including critical thinking, creativity, problem solving skills so that they are able to meet contemporary needs and can become responsible citizens who can further contribute for national development and be ready to tackle global challenges.



Dr. Nahar Singh

Joint Director, SCERT

Chief Advisor

Mr. Rajanish Kumar Singh, Director, SCERT Delhi

Academic Head & Advisor

Dr. Nahar Singh, Joint Director, SCERT Delhi

Project Co-ordinator

Ms. Raman Arora, Assistant Professor, SCERT, Delhi

Dr. Bindu Saxena, Assistant Professor, SCERT, Delhi

Nodal Co-ordinator

Dr. Bindu Saxena, Assistant Professor, SCERT, Delhi

Development Team

Ms. Divya Mann, Assistant Professor, DIET Keshav Puram

Dr. Veena Rana, Assistant Professor, DIET Pitam Puram

Ms. Dimple Bhateja, Mentor Teacher, DoE

Ms. Bharti, Core Academic Unit, DoE

Mr. Shivendra Kumar Gupta, Assistant Teacher, EDMC

Dr. Bindu Saxena, Assistant Professor, SCERT, Delhi

Translation Team

Mr. Ajay Kishore, Mentor Teacher, DoE

Mr. Shailendra Kumar Sharma, TGT(Drg.) KGSBV, Chirag Enclave, Delhi

Mr. Brajesh Kumar Jadon, Assistant Teacher, EDMC

Mr. Shivendra Kumar Gupta, Assistant Teacher, EDMC

Dr. Jayotsna, Lecturer, SCERT, Delhi

Vetting Team

Dr. Sarla Verma, Assistant Professor, DEE, NCERT

Ms. Poonam Katyral, TGT, Core Academic Unit, DoE

Ms. Smridhi Soni, Assistant Teacher, The Heritage School, Vasant Kunj

Dr. Neeta Verma, Mentor Teacher, DoE

Publication Officer

Dr. Mukesh Yadav

Publication Team

Sh. Navin Kumar

Ms. Radha

Environmental Studies Worksheets Based on Learning Outcomes (Class-3)

Guidelines for Teachers

1. SCERT Delhi has developed worksheets based on learning outcomes for the purpose of practice of students.
2. There are ten (10) worksheets containing fifteen (15) Multiple Choice Questions (MCQs) in each worksheet.
3. Each question has four choices, one of them is the correct answer. The students have to mark the correct answer appropriately using (✓) mark. For example:

For example –

Which of the following is a fruit?

- ✓ B) Mango
 - B) Rose
 - C) Potato
 - D) Lotus
4. There are two revision worksheets at the end. Each worksheet has 25 questions.
 5. Answer key is given at the end of the Worksheets.
 6. Teacher can explain the logic behind the correct answer.
 7. You should not hurry for the completion of worksheet.
 8. You must ensure that each student attempts all the questions.
 9. Encourage students to find out the correct answer to the questions.
 10. You are advised to prepare more such sets for practice of the students.
 11. Teachers should keep a record of the progress of all the students and try to improve the learning outcomes.


Environmental Studies

CLASS-3

1. Mary has drawn a new animal.
She has used parts of different animals.
Find these animals.

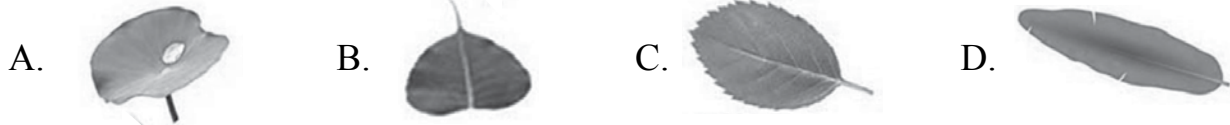
Choose the right option with name of animals in the given picture.

- A. Duck, Rat and Dog
B. Elephant, Duck and Camel
C. Parrot, Frog and Buffalo
D. Cock, Cat and Horse



2. Kareem collected leaves of some plants.


Which leaf is the rose leaf ?



3. Look at the picture. Which is Part F and Part T?

Choose the correct pair.


	F	T
A.	Jasmine	Marigold
B.	Lotus	Rose
C.	Jasmine	Sunflower
D.	Marigold	Lotus




4. Gagan went to a garden.
He saw leaves of different plants.
Which is the longest leaf ?




5. Poonam has a garden.
It has many plants.
She saw following leaves in the garden:



Which is the plant having smallest leaf?

- A. Tamarind B. Banana C. Papaya D. Rose
6. The leaves of which plant are used to make the design on this hand?
A. Mint
B. Mehendi
C. Marigold
D. Jasmine
- 
7. Your mother prepared chutney.
The leaves of which plant did she use to make chutney?
A. Mint B. Tulsi C. Mango D. Orange
8. Pawan is sitting under a tree.
Which animal could he see on the branch of the tree?
A. Fish B. Pigeon C. Dog D. Rabbit
9. Sara saw these animals from the window.



Arrange these animals from smallest to biggest on the basis of their size.

- A. Rat, cow, cat, dog B. Cow, cat, rat, dog
C. Rat, cat, dog, cow D. Cat, dog, cow, rat
10. Tina was standing near a pond.
She saw a frog.
The frog was moving by _____.
A. Crawling B. Running C. Hopping D. Sliding

11. I can crawl.
Find me.



- A. Frog B. Dog C. Earthworm D. Pigeon

12. I have wings.
I am colourful.
Who am I?




13. I hop.
I eat insects.
Who am I?

- A. Cow B. Goat C. Rabbit D. Frog

14. I have a tail.
I am black.
I have four legs.
Find me.

- A. Sparrow
B. Buffalo
C. Lion
D. Crow



15. Yash has grown these vegetables.



Which vegetable has rough surface?

- A. Brinjal B. Tomato C. Bitter gourd D. Bottle gourd

Environmental Studies

CLASS-3

1. You see a beautiful rose on a plant.

What will you do?

- A. Pluck it and keep in your pocket
- B. Pluck and tear the flower away
- C. Leave it on the plant
- D. Pluck it and give it to teacher

Look at the picture and answer Q.2 and 3:



2. Find the smallest animal in the picture.

- A. Dog
- B. Pigeon
- C. Ant
- D. Horse

3. Find the largest animal in the picture.

- A. Dog
- B. Pigeon
- C. Ant
- D. Horse

4. You use water for different activities.

In which activity the maximum amount of water is used?

- A. Bathing
- B. Drinking
- C. Cooking food
- D. Brushing the teeth

5. Deepu has four things-plate, tiffin, bucket and spoon.

He wants to store water.

Which vessel should he use to store more water?

A.



B.



C.



D.



6. **Ravi and Prakash were playing near the pond.**
Ravi said, “The water in the pond is very clean.”
Prakash asked, ‘Where does this water come from?’
Ravi said, “Ponds get clean water directly from ____.”
 A. mountains B. rain C. sea D. river
7. **Reena ate chips.**
She threw the wrapper in drain.
Her mother scolded her because the wrapper can-
 A. be returned to the shopkeeper B. be used for playing
 C. choke the drain D. be used again
8. **You washed your clothes.**
Water is left in the bucket.
What is the best use of this water?
 A. Throw it anywhere B. Clean the floor
 C. Water the plants D. Play with it
9. **What happens when you add 1 cup ice in half a glass of water?**
 A. Water becomes cold and freezes
 B. Small droplets of water are formed outside the glass
 C. Ice melts and water becomes hot
 D. Steam comes out from ice and make glass hot
10. **There is only one well in a village.**
Who should be allowed to take water from it?
 A. People living near the well
 B. People who can pay money for the water
 C. All people of the village
 D. Owner of the well
11. **Radha wants to fill a bucket with water.**
Which vessel will help in quickly filling the bucket?




- 12. Mohan has just reached home from school. He has removed his shoes. What should he do now?**
- A. Wash hands
 - B. Play with his shoes
 - C. Throw away the shoes in the room
 - D. Eat food immediately
- 13. My uncle got married recently. Now, I have an aunt. How does my family change?**
- A. Family got bigger
 - B. Family got smaller
 - C. No change in family
 - D. The work in the family increased
- 14. How will you help your parents, when some guests come to your home?**
- A. Sit in another room
 - B. Ask parents to play with you
 - C. Ask parents to go outside
 - D. Help your parents
- 15. My grandparents went to live with my uncle for some time. How does my family change?**
- A. My family got bigger
 - B. My family got smaller
 - C. No change in family
 - D. I respect my grand parents

Environmental Studies

CLASS-3

1. **You received a letter from postman. What will you do with it?**
 - A. Make a paper aeroplane
 - B. Tear and throw it
 - C. Show it to your parents
 - D. Use it for any other purpose

 2. **The man in this picture is**
 - A. Irrigating field
 - B. Ploughing field
 - C. Cutting crops
 - D. Riding bullock cart
- 
3. **The son of your mother's father is your**
 - A. Maternal uncle
 - B. Paternal uncle
 - C. Grand father
 - D. Brother

 4. **Rajan broke a glass tumbler by mistake. What he should do now?**
 - A. Cry loudly
 - B. Hide the pieces of glass
 - C. Not do anything
 - D. Be honest and tell his parents

 5. **Choose the right option about cooking at home.**
 - A. Girls can cook well
 - B. Boys can cook well
 - C. Anyone can cook
 - D. Only mothers should cook

 6. **Arun gets late for school.**
His bag is not ready.
What should he do?
 - A. Ask mother for help
 - B. Ask brother for help
 - C. Ask grandparents for help
 - D. Pack his bag on his own the night before

7. **Jimmi wants to know how people used to talk to each other when there were no phones. Whom should he ask?**
- A. Younger brother B. Grand Father
C. Friend D. Younger sister
8. **Chotu came to a big city. His mother looked for a new home. Why?**
- A. To store costly things B. To watch television
C. To protect themselves D. To welcome guests
9. **Following animals live in Madhu's house. Which of them are uninvited animals?**
- A. Lizard, rat, goat B. Lizard, goat, spider
C. Lizard, rat, dog D. Lizard, rat, spider
10. **I saw an animal in a corner of my room, it was weaving its house. It was**
- A. Mosquito B. Cockroach C. Butterfly D. Spider
11. **Meena: We should keep the toilets clean. Why does she say so?**
- A. To avoid diseases B. To use extra water
C. To keep a tradition D. To show a good toilet
12. **Radha was surprised to know that rats have poor eye-sight. How do they find sweets kept on the shelf?**
- A. By tasting B. By touching C. By smelling D. By seeing
13. **If you visit Punjab, which famous local dish would you get there?**
- A. Idli-vada B. Khaman-dhokla
C. Sarson ka saag D. Litti-chokha
14. **The common ingredient in Kheer, Khichadi, Dosa and Idli is**
- A. Wheat B. Corn C. Gram D. Rice
15. **Your classmate has not brought food in the school, what will you do?**
- A. Share your lunch B. Hide your lunch
C. Not do anything D. Complaint to teacher

Environmental Studies

CLASS-3

1. Dish in the given picture is the famous dish of which state?

- A. Kerala
- B. Bihar
- C. Gujarat
- D. Assam



2. What should we eat, if we want to be fit?

- A. Toffee
- B. Biscuits
- C. Fruits
- D. Chocolate


3. Maya was eating one of the things given below.

Her mother scolded her and told it is unhealthy.

What was Maya eating?

- A. Milk
- B. Egg
- C. Fruits
- D. Chips

4. Your friend is smiling. How is he looking?

- A. 
- B. 
- C. 
- D. 

5. You are eating ice-cream, suddenly it fell down.

How will you feel?

- A. Happy
- B. Sad
- C. Angry
- D. Excited

6. If you meet this person on the road, then what will you do?

- A. Ignore and walk away
- B. Show pity on him
- C. Ask if he need help
- D. Laugh at him



7. Gyan uses sign language. He cannot _____.

- A. speak & see
- B. hear & walk
- C. speak & hear
- D. see & walk

7. **David saw a rainbow in the sky. The rainbow had _____ colours.**
A. 6 (six) B. 7 (seven) C. 8 (eight) D. 9 (nine)
8. **Deepa saw that some rain-drops freeze and they fall on earth as _____.**
A. Wind-storm B. Hail C. Dew D. Fog
9. **You came back from school. You have water in your bottle.**
How will you use it?
A. Throw it on friends B. Pour it in a plant
C. Throw it into drain D. Wash your clothes
10. **Meena observed the vessels in the kitchen. She found that the vessels used for cooking are made of**
A. Paper B. Plastic C. Wood D. Steel
11. **Shahid is very hungry. He does not know cooking.**
He has four things- Maize, Tomato, Rice and Wheat.
What can he eat among these?
A. Maize B. Tomato C. Rice D. Wheat
12. **Ritu has prepared a list of food items.**
These can be eaten in both raw and cooked form.
List- Paneer, Tomato, Cabbage, Onion
Add one more food item to this list from the options given below.
A. Daal B. Rice C. Carrot D. Wheat
13. **Davis is making chapattis for the first time.**
Tell him the correct sequence to make chappattis.
A. Kneading, making dough ball, rolling, baking
B. Making dough ball, baking, rolling, kneading
C. Rolling, kneading, making dough ball, baking
D. Making dough ball, rolling, baking, kneading

14. Kutty uses this device for cooking food.

Which fuel is used in this device ?

A. Electricity

B. Sunlight

C. Coal

D. Gas



15. Rakesh uses heater for making tea.

What produces heat in the heater?

A. Electricity

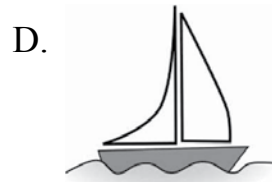

B. Sunlight

C. Coal

D. Gas



7. **Rani lives in Chennai.**
She wants to go to Punjab for her bua's wedding.
Choose the best means of transport for Rani to go to Punjab.



8. **Sweety wants to go to her home.**
It is across the river.
What will she use?

- A. Car B. Bus
 C. Boat D. Train



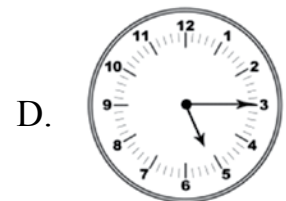
9. **You are going to school.**
Your shoes are broken.
Who will repair your shoes?

- A. Mechanic B. Cobbler C. Plumber D. Carpenter

10. **Sia is sick.**
Who can treat her?

- A. Teacher B. Postman C. Doctor D. Police

11. **You have to reach your school at 7 O' clock.**
Which clock shows 7 O' clock time?



12. **Sudha and Saloni are in the school.**

They are playing.

Sudha got hurt.

What will Saloni do?

- A. Laugh at Sudha
- B. Leave Sudha in the ground
- C. Start crying
- D. Take Sudha to the medical room

13. **Ravi is visually impaired.**

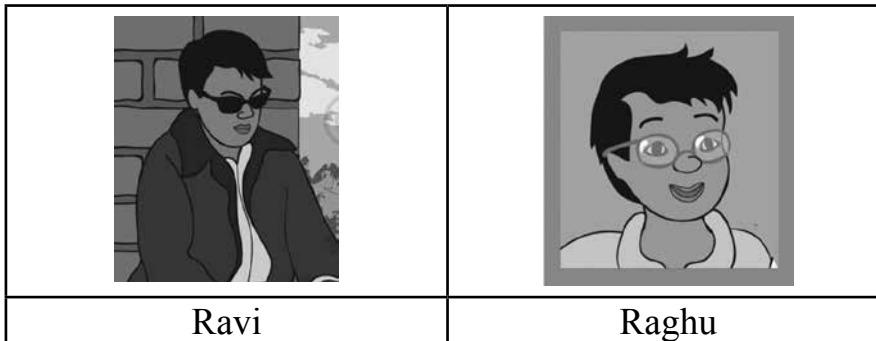
He is reading a book.

In which script would this book be written ?

- A. Gurmukhi script
- B. Devnagri script
- C. Picture script
- D. Braille script



14. **Ravi and Raghu are classmates.**



They are talking to each other.

Ravi: Will you become my friend?

Raghu: No.

How will Ravi feel?

- A. Good and happy
- B. Good and sad
- C. Sad and insulted
- D. Happy and insulted

15. **Vasu has grown some plants.**

What can he get from them to make a sandwich?

- A. Milk, Tomato
- B. Carrot, Eggs
- C. Eggs, Milk
- D. Tomato, Carrot

Environmental Studies

CLASS-3

1. **Mini is allergic to foods that we get from animals.**
What should she avoid eating?
A. Potato B. Banana C. Milk D. Onion
2. **Pawan has cough and cold.**
Her mother gave her a leaf to eat.
Which leaf is it?
A. Spinach B. Amla C. Potato D. Tulsi
3. **Tanvi's father made the amla murabba.**
Which part of amla tree did he use?
A. Stem B. Leaf C. Fruit D. Flower
4. **What would your mother give, when you have stomach ache?**
A. Green Chilli B. Mint (pudina)
C. Red Chilli D. Salt
5. **Reena wants to buy earthen diyas.**
Whom will she go to?
A. Cobbler B. Potter C. Goldsmith D. Blacksmith
6. **Bablu wants to make an earthen pot.**
What will he use?
A. Clay B. Stone C. Glass D. Wood
7. **Anita wants to dig out clay to make earthen pots.**
What will she use to dig the clay?
A. Stick B. Knife C. Spade D. Hammer
8. **Meenu was reading the newspaper.**
She saw the picture of Sania Mirza.

Sania was holding a ball.

Which game does Sania play?

- A. Tennis B. Hopscotch C. Kabaddi D. 7 Tiles

9. It is raining outside.

What can Meenu play inside her home?

- A. Ludo B. Cricket C. Kabaddi D. Football

10. Mamaji bought a ball for Seema.

Which game can she play with it?

- A. Ludo B. Basketball
C. Kabaddi D. Hide-And-Seek

11. Raju and Anil were playing cricket.

Seema and Kirti wanted to play cricket with them.

But Raju and Anil did not allow them to play cricket.

What do you think?

- A. Only boys can play cricket
B. Only girls can play cricket
C. Both boys and girls can play cricket
D. Only adults can play cricket

Look at the picture and mark the correct answers for Q 12-14:



- 12. Which game are they playing?**
A. Ludo B. Carrom C. Chess D. Hop- scotch
- 13. How many colours are used to make boxes in this board?**
A. 5 B. 6 C. 3 D. 2
- 14. This game is played with _____.**
A. dice B. pawn C. ball D. marble
- 15. I am red in colour.
I carry letters and telegrams.
Who am I?**
A. ATM Van B. Police van C. Postal van D. Ambulance

Environmental Studies


CLASS-3

1. Look at the picture.

This house is made above the ground.

They are made on strong bamboo pillars. Why?

- A. Due to snow
- B. For decoration
- C. Due to heavy rains
- D. Due to no rain



2. Fiza lives in Srinagar. _____

She likes the famous hot drink of Srinagar.

- A. kahwa
- B. tea
- C. coffee
- D. lassi

3. Ruby lives in Kashmir.

She can see the houseboats _____.

- A. on the road
- B. in the ground
- C. in the lake
- D. in the air

4. Manu's grandmother is not able to climb stairs. What can she use to reach the tenth floor easily?

- A. Staircase
- B. Lift
- C. Ramp
- D. Rope

5. Aman wants to feed pigeons. Which of the following will he use?

- A. Meat
- B. Chilli
- C. Milk
- D. Grain

6. Animals and humans cannot live without _____.

- A. air, water, butter
- B. air, water, bread
- C. air, water, food
- D. air, water, milk

7. Natwar has a pet cow. The cow gave birth to _____.

- A. puppy
- B. kitten
- C. hare
- D. calf

8. Neha has two goats. What can she use to feed them?

- A. Meat, grass
- B. Egg, fruits
- C. Honey, milk
- D. Vegetables, grass

9. **Pinky has a horse in her backyard. How can she use the horse?**
A. For pulling the cart B. For giving milk
C. For ploughing field D. For guarding her house
10. **Bholi wants to keep a pet with her. Help her in choosing a pet from the animals given below:**
A. Lion B. Giraffe C. Tiger D. Dog
11. **Habib washed the vegetables with water. How can he use this water again?**
A. For washing Utensils B. For watering Plants
C. For drinking D. For bathing
12. **Ramu lives in Rajasthan. There is very less water in Rajasthan. Ramu can save water by _____.**
A. making pots B. digging tube well
C. digging canals D. making Tanks (tankas)
13. **Priya wants to save water. How can she save water?**
A. Reusing Water B. Playing with water
C. Bathing In Showers D. Keeping tap open while brushing
14. **You want to save rain water in your school. You use _____ to save rain water in your school.**
A. underground tanks B. overhead tanks
C. big buckets D. big pots
15. **Pinky and Madhav live with their children Geeta and Sachin. Choose the correct statement.**
A. Geeta is Pinky's daughter
B. Geeta is Sachin's daughter
C. Sachin is father
D. Geeta is mother



Environmental Studies

CLASS-3

1. **Dia and Ria look same.**

How are they related?

- A. Mother and father
- B. Brother and sister
- C. Uncle and aunt
- D. Twin sisters



2. **Sara's mother is ill. Sara can help her by _____.**


- A. giving her some task
- B. asking her to give money
- C. giving her something to eat
- D. asking her to play with her

3. **To live together in the family what should we do?**

- A. Fight with each other
- B. Make fun of each other
- C. Scream at each other
- D. Help each other

Look at the picture and answer Q 4 and 5:

Ruchira is sitting in the middle.



4. **Book is at _____ side of Ruchira.**

- A. right
- B. left
- C. up
- D. down

5 Fruits are on the _____ side of Ruchira.

- A. left B. right C. up D. down

6. Cheeku is holding a cut out of letter 'F' in front of a mirror.

How will it look in the mirror?


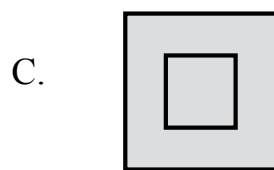


- A. **T** B. **E** C. **J** D. **F**

7. Rinki is holding a cut-out of letter 'Q' in front of mirror.


How will it look in the mirror?

- A. **Q** B. **O** C. **Q** D. **D**

8. On her way to school, Madhu saw a hospital. Which symbol did she see for the hospital?



9. Choose the sign for danger symbol.



10. After seeing red light on traffic signal, vehicle should

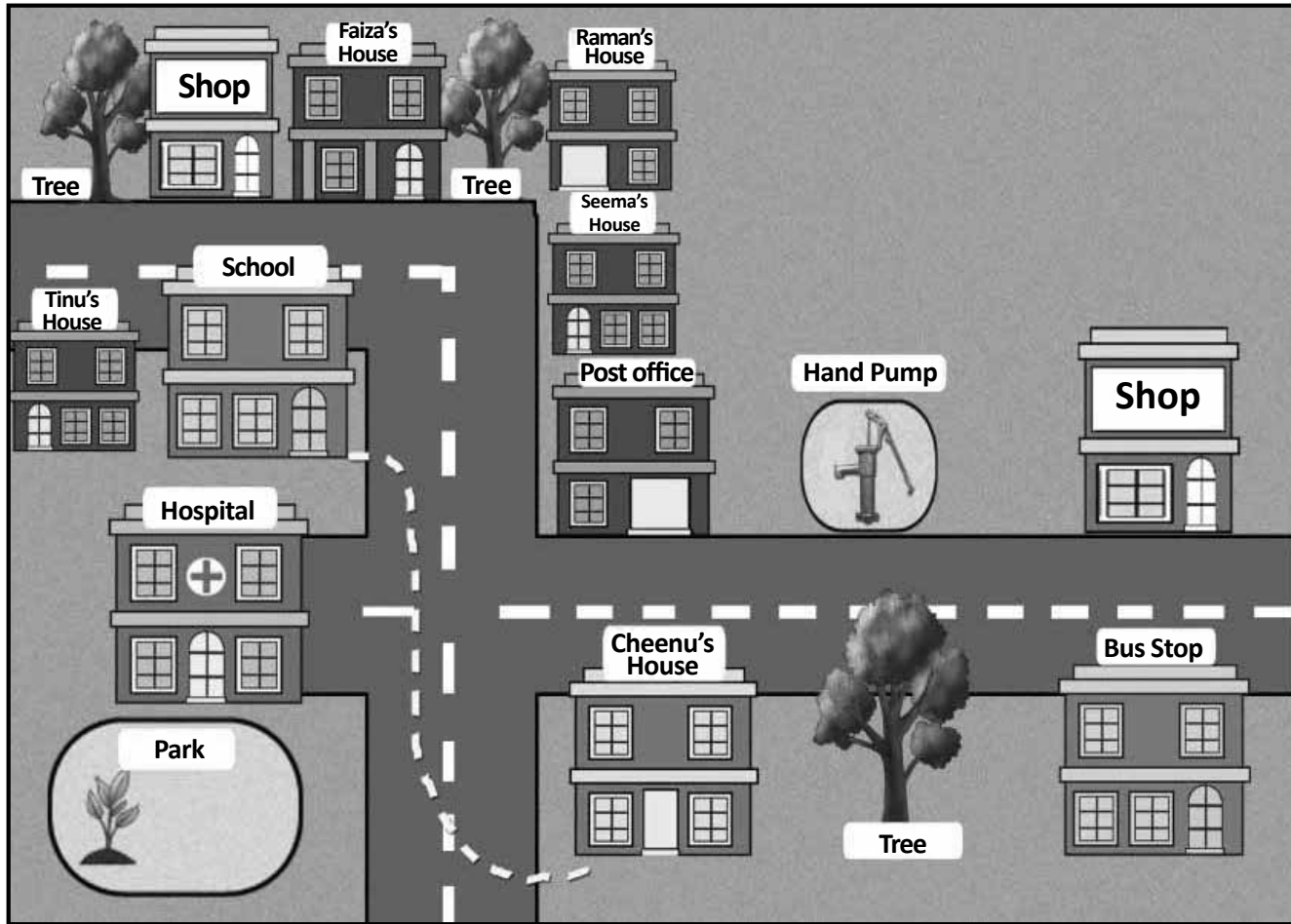
- A. Stop
- B. Go slow
- C. Go fast
- D. Wait



11. On seeing the green light on a traffic signal, the vehicles should

- A. Stop
- B. Go slow
- C. Go
- D. Wait

Look at the map of Cheenu's town and answer Q 12 – 15.



CHEENU'S TOWN

- 12. Which place will Cheenu find on her way from home to school?**
A. Hand pump B. Bus stop C. Hospital D. Tinu's house
- 13. What is near the bus stop?**
A. Hospital B. School
C. Faiza's house D. Cheenu's house
- 14. How many trees are there in the map?**
A. 3 trees B. 5 trees C. 4 trees D. 6 trees
- 15. How many houses are there in the map?**
A. 4 houses B. 5 houses C. 6 houses D. 3 houses

Environmental Studies

CLASS-3

1. **Clothes used in kitchen are made from:**
A. Cotton B. Paper C. Wood D. Glass
2. **Rahul wants to get cotton from cotton plant.**
From which part of the cotton plant, he will get cotton?
A. Flower B. Leaf C. Seeds D. Roots
3. **Geeta wants to make thread. What will she buy to make thread?**
A. Loom B. Sewing machine
C. Needles D. Hammer
4. **We store wheat in bags.**
These bags are made up of _____.
A. jute B. cotton C. wool D. silk
5. **Reena makes silk sarees.**
From where does she get silk?
A. From a fly B. From cockroach
C. From earthworms D. From silk worms
6. **Ravi saw a beautiful dupatta.**
It had vegetable print on it.
Which vegetable could that be?
A. Tomato B. Peas
C. Papaya D. Cauliflower
7. **Gurpreet had four types of cloth. She rubbed her hands on each cloth.**
_____ was the roughest cloth.
A. cotton B. jute
C. silk D. wool

8. In winters, we wear sweaters to protect ourselves. Sweaters are made up of _____.

- A. cotton B. wool C. silk D. polyester

9. Reena saw an unstitched cloth in her room. The cloth is _____.

- A. shirt B. frock C. turban D. cap

10. Asad is scared of lizards.

Moti said that lizards are our friends.

Lizards help us by eating _____.

- A. grass B. rats C. mosquitoes D. fish

11. Plants also need nutrition.

They get nutrition from _____.

- A. eggs B. soil C. sugar D. milk


12. Preeti saw an animal.

The animal had stripes on it's body.

Find the animal.

- A. Rat B. Squirrel C. Rabbit D. Cockroach

13. Look at the picture.



Who eats whom?


- A. Tiger eats grass B. Deer eats tiger
C. Tiger eats deer D. Tiger eats grasshopper

14. Lion eats goat.

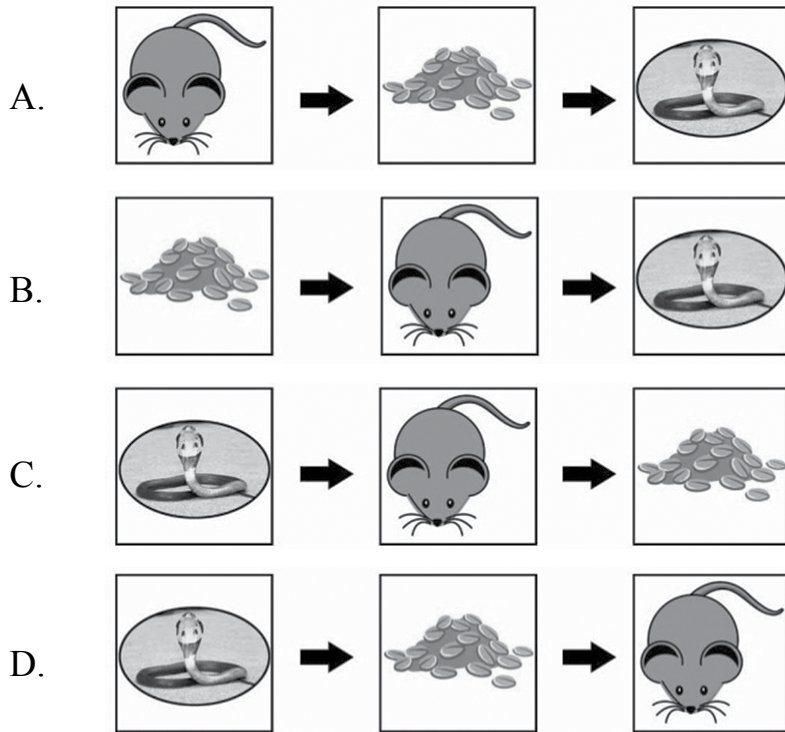
Goat eats fruits and vegetables.

Choose the correct option.





15. Snake eats rat.
Rat eats grain.
Choose the correct option.



7. **Joe keeps his house clean. He wants to _____**
A. get appreciation B. avoid diseases
C. allow rats inside D. follow tradition
8. **Natasha has one-month old younger sister.**
The food of the baby girl is _____.
A. sāmbar B. hot-Soup C. mother’s milk D. tea
9. **You are playing cricket. You broke the window glass. You will feel _____**
A. Happy B. Angry C. Excited D. Afraid
10. **We should avoid flying kites as**
A. Kite flying is not easy
B. Birds get stuck in kite’s string
C. Birds sit on the kite
D. Kites creates too much noise
11. **Reena saw a bird with green feathers and red beak.**
Name the bird.
A. Crow
B. Parrot
C. Cuckoo
D. Pigeon
12. **When David saw the rainbow, _____ was also there in the sky.**
A. Moon B. Sun C. Star D. Storm
13. **Sabiya has four types of fuels.**
One fuel is dangerous if used in kitchen.
Which fuel should Sabiya not use in the kitchen?
A. Kerosene oil B. Wood
C. Cow dung cake D. Petrol
14. **Reena uses this stove.**
What produces heat in this stove?
A. Electricity B. Sun light
C. Coal D. Gas



15. On her way to her Grandfather's village, Divya saw train, bus, bullock-cart and bicycle.

Which one of the above vehicles is drawn by animals?

A. Bus B. Cycle C. Bullock-cart D. Train

16. You have received money from school.

Where will you deposit it?

A. Hospital B. Petrol Pump C. Police station D. Bank

17. Jim, Rao, Tina and Manu are playing blindfold game.

Now, it is Jim's turn.

He will catch others by _____

A. hearing & looking B. hearing & touching
C. looking & touching D. speaking & touching

18. Mira wants to know which game her grandparents played when they were young. Please tell her the name of the game.

A. Video game B. House-House
C. Pub G D. Temple Run

19. Kunal and Neha are playing a game on a colourful board.

What are they playing?

A. Hockey B. Cricket
C. Snake and ladder D. Chess

20. I carry a big bag.

I bring letters.

Who am I?

A. Policeman B. Watchman C. Postman D. Lineman

21. In olden times, there were no phones.

How would people send messages to far off places?

A. Phone call B. Letter C. Email D. Video call

22. Rajan lives near a big river.

He sees many houses that float and move on water.

What are they called?

A. Tent B. Hut C. Igloo D. House Boat

23. **Bina sells honey.**

Which insect does she keep in her farm?

- A. Earthworm B. Bees C. Grasshopper D. Cockroach

24. **Prerna is a milk seller.**

Which animal provides her milk?

- A. Snake B. Tiger C. Horse D. Cow

25. **Rabia has these animals in her home.**



Among these, which animal gives her eggs?

- A. Dog B. Cat C. Goat D. Hen

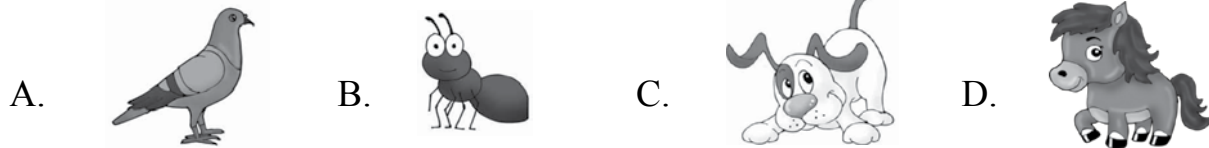
Revision Worksheet

CLASS-3

1. Pooja has bought a pet dog.
There are other animals also in her house.
They have not bought these animals.
Find the animals.

- A. Lizard, eagle, rat
B. Lizard, rat, ant
C. Eagle, rat, dog
D. Eagle, rat, Lizard

2. Find the animal which can fly.



3. Puran stores water in cans.
He does it daily.

Why does he store water?

- A. To play with it
B. As a custom
C. To use it later
D. To use vessels in home

4. Madhu's father cleans the house every day.
What can Madhu do to help her father?

- A. Throw things here and there
B. Ask grandmother to do it
C. Clean only on Sundays
D. Clean along with him

5. Neena: I will buy parrot.
Sohan: Where will you keep it?
Neena: In my house.

Where do parrots love to live?

- A. Box
B. Burrows
C. Trees
D. Cages


6. My 80 years old grandfather can easily eat _____.

- A. bhutta
B. gram
C. sugarcane
D. orange

7. **Your classmate can not hear and speak, What can be helpful to make him friend?**

- A. Speaking
- B. Braille
- C. Sign language
- D. Loud speaker

8. **A bird has pink beak and pink claws. The bird is:**




9. **A bird has yellow beak and yellow feet. The bird is:**

- A. Peacock
- B. Pigeon
- C. Crow
- D. Myna

10. **I have webbed feet.**

My feet help me to _____

- A. fly over trees
- B. float in water
- C. catch my prey
- D. walk on land



11. **Puran is standing on a water-logged road, he should _____.**

- A. Throw stones in water
- B. Throw water on each other
- C. Go carefully and slowly
- D. Go fast and run

12. **Given below is the recipe of making rice.**

What is happening in Picture 3?

- A. Soaking rice in water
- B. Boiling rice
- C. Frying rice
- D. Baking rice

Picture 1



Picture 2



Picture 3



13. **In rainy season, Meera sells bhutta (corn).**

She _____ bhutta on coal.

Then she adds spices and lemon juice.

- A. boils
- B. fries
- C. bakes
- D. roasts

14. On her way to school, Meera saw bus, scooter, truck and bicycle.

Which of these vehicles have more than two wheels each?

- A. Scooter, truck
- B. Bus, truck
- C. Bicycle, truck
- D. Bus, scooter

15. You have a six month old sister.

Your father has to go for her vaccination.

Where will he go?

- A. Hospital
- B. Petrol Pump
- C. Police station
- D. Bank

16. Your friend reads the Braille script by touching and _____.

- A. seeing
- B. feeling
- C. drawing
- D. writing



17. Rohit likes to play four games.

Computer Game	Mobile Game
Video Game	Football

Which game helps him to become fit and healthy?

- A. Computer Game
- B. Mobile Game
- C. Video Game
- D. Football

18. Seema made a game on floor.

She used chalk to draw it.

Which game is it?

- A. Stappoo (hop scotch)
- B. Chess
- C. Ludo
- D. Snakes and ladder

19. Earlier telephones had long wires. To send a message quickly and in few written words, we used _____.

- A. telegram
- B. email
- C. computer
- D. mobile phone

20. Many children live in Raju's colony.

Choose a game that can be played by more than 4 children.

- A. Chess B. Wrestling C. Kabaddi D. Ludo

21. Birawar lives in Manali.

The roofs of houses in his area are _____.

- A. slanting
B. flat
C. oval
D. round



22. Ritu saw a grasshopper in her garden.

The grasshopper ate _____.

- A. bread B. leaves C. insects D. potato

23. Guddan saw an animal.

The animal was changing its colour.

Choose that animal.

- A. Chameleon B. Snake C. Rat D. Butterfly

24. I spread diarrhoea.

Who am I?

- A. Honey bee B. Dragon fly C. House fly D. Butter fly

25. There are no flowers in the garden. Who will get affected the most?

- A. Snake B. Cow C. Dogs D. Bees

Environmental Studies

CLASS-3

ANSWER KEY

Worksheet-1

1.	B	2.	C	3.	B	4.	C	5.	A	6.	B	7.	A	8.	B	9.	C	10.	C
11.	C	12.	B	13.	D	14.	B	15.	C										

Worksheet-2

1.	C	2.	C	3.	D	4.	A	5.	C	6.	B	7.	C	8.	B	9.	B	10.	C
11.	D	12.	A	13.	A	14.	D	15.	B										

Worksheet-3

1.	C	2.	B	3.	A	4.	D	5.	C	6.	D	7.	B	8.	C	9.	D	10.	D
11.	A	12.	C	13.	C	14.	D	15.	A										

Worksheet-4

1.	C	2.	C	3.	D	4.	B	5.	B	6.	C	7.	C	8.	A	9.	B	10.	B
11.	C	12.	C	13.	D	14.	B	15.	B										

Worksheet-5

1.	B	2.	D	3.	A	4.	B	5.	A	6.	C	7.	B	8.	B	9.	B	10.	D
11.	B	12.	C	13.	A	14.	B	15.	A										

Worksheet-6

1.	A	2.	B	3.	D	4.	C	5.	D	6.	D	7.	C	8.	C	9.	B	10.	C
11.	C	12.	D	13.	D	14.	C	15.	D										

Worksheet-7

1.	C	2.	D	3.	C	4.	B	5.	B	6.	A	7.	C	8.	A	9.	A	10.	B
11.	C	12.	C	13.	D	14.	B	15.	C										

Worksheet-8

1.	C	2.	A	3.	C	4.	B	5.	D	6.	C	7.	D	8.	D	9.	A	10.	D
11.	B	12.	D	13.	A	14.	A	15.	A										

Worksheet-9

1.	D	2.	C	3.	D	4.	A	5.	A	6.	D	7.	A	8.	A	9.	B	10.	A
11.	C	12.	C	13.	D	14.	A	15.	B										

Worksheet-10

1.	A	2.	C	3.	A	4.	A	5.	D	6.	D	7.	B	8.	B	9.	C	10.	C
11.	B	12.	B	13.	C	14.	C	15.	B										

Revision Exercise 1

1.	C	2.	C	3.	B	4.	A	5.	A	6.	D	7.	B	8.	C	9.	D	10.	B
11.	B	12.	B	13.	D	14.	D	15.	C	16.	D	17.	B	18.	B	19.	C	20.	C
21.	B	22.	D	23.	B	24.	D	25.	D										

Revision Exercise 2

1.	B	2.	A	3.	C	4.	D	5.	C	6.	D	7.	C	8.	B	9.	D	10.	B
11.	C	12.	B	13.	D	14.	B	15.	A	16.	B	17.	D	18.	A	19.	A	20.	C
21.	A	22.	B	23.	C	24.	C	25.	D										