

Environmental Studies

Worksheets

(Based on Learning Outcomes)

Class- 5



स्वाध्यायान्मा प्रमदः

State Council of Educational Research and Training

Varun Marg, Defence Colony, New Delhi-110024

PREFACE

The National Policy on Education 2020 suggests for an increased focus on foundational literacy and numeracy with special focus on reading, writing, speaking, counting, arithmetic, and mathematical thinking throughout the preparatory and middle school education. It also suggests for a robust system of continuous, formative/adaptive assessment to track individualized learning and academic progress.

The academic loss due to Covid -19 pandemic has created a huge learning deficit and students are lagging behind in terms of learning outcomes. Learning Outcomes serve as benchmark for students' achievement in each class and subject. The Learning Outcomes for each class in Languages (Hindi, English and Urdu), Mathematics, Environmental Studies, Science and Social Science up to the elementary stage (Class 1 to 8) have been developed by NCERT and adapted by SCERT Delhi.

To bridge the learning gaps caused by the pandemic and to improve learning levels of students, SCERT Delhi has developed worksheets based on learning outcomes for class 3, 5 and 8. The worksheets for classes 3 and 5 have been developed for subjects: Mathematics, Environmental Studies and Languages (Hindi & English) and for class 8 Science, Mathematics, Social Science and Languages (Hindi & English). Each subject has 10 worksheets with 15 MCQs for each worksheet.

These worksheets are provided for practice purpose to improve the competencies of students. These are exemplar and teachers can frame similar worksheets/questions for practice. Guidelines for teachers are also there in each subject booklet to help teachers get better understanding of objectives and content of the worksheets.

It gives me immense pleasure to hand over these worksheets to teachers, our nation builders who are striving and working hard to impart quality education to students. We all as stakeholders need to work collectively to facilitate our students to attain higher order competencies including critical thinking, creativity, problem solving skills so that they are able to meet contemporary needs and can become responsible citizens who can further contribute for national development and be ready to tackle global challenges.



Dr. Nahar Singh

Joint Director, SCERT

Chief Advisor

Mr. Rajanish Kumar Singh, Director, SCERT Delhi

Academic Head & Advisor

Dr. Nahar Singh, Joint Director, SCERT Delhi

Project Co-Ordinator

Ms. Raman Arora, Assistant Professor, SCERT, Delhi

Dr. Bindu Saxena, Assistant Professor, SCERT, Delhi

Workshop Co-Ordinator

Dr. Bir Singh Rawat, Assistant Professor, SCERT, Delhi

Development Team

Dr. Bir Singh Rawat, Assistant Professor, SCERT, Delhi

Dr. Sonu Lal Gupta, Assistant Professor, SCERT, Delhi

Dr. Sarita Assistant Professor, DIET Ghummanhera, Delhi

Ms. Kavita Meena, DIET Ghummanhera, Delhi

Mr. B.P Sharma TGT(N.Sc.), GBSSS No.2, Badarpur, Delhi

Dr. Neeta Verma, PGT, GSV(Co.Ed) SSS, Possangipur, B-1 Janakpuri, Delhi

Translation Team

Dr. Sarla Verma, Assistant Professor, NCERT Delhi

Ms. Nisha Jain MT (TGT Hindi), GGSSS, Jhilmil Colony, Delhi

Dr. Rekha Rani Kapoor, Assistant Professor, SCERT, Delhi

Mr. Sharad Sharma Assistant Professor, SCERT, Delhi

Dr. Tapsa Verma Assistant Professor, SCERT, Delhi

Ms. Seema Sexena PGT, GGSSS, Vivek Vihar Phase-II, Delhi

Vetting Team

Ms. Harpreet Kaur, MT, GSV(Co.Ed) SSS, Possangipur, B-1 Janakpuri, Delhi

Ms. Purna Sharma, IASE, Faculty of Education JMI, Delhi

Mr. Brajesh Kumar Jadon, Teacher, EDMC (Primary) School, 'O' Block -I Dilshad Garden, Delhi

Ms. Jony Mathew, TGT English, RPVV, Hari Nagar Delhi

Mr. Shailendra Kumar Sharma, TGT(Drg.) KGSBV, Chirag Enclave, Delhi

Publication Officer

Dr. Mukesh Yadav

Publication Team

Sh. Navin Kumar

Ms. Radha

Environmental Studies Worksheets Based on Learning Outcomes (Class-5)

Guidelines for Teachers–

1. State Council of Educational Research and Training, Delhi has developed worksheets based on learning outcomes for the purpose of practice only.
2. There are ten (10) worksheets of fifteen (15) Multiple Choice Questions (MCQs) each.
3. Each question is having four choices one of them being the correct answer. The students are to mark the correct answer appropriately using (✓) marks.

For example–

Which of the following is the body temperature of a healthy person?

- A) 99.0°F
 - ✓ B) 98.6°F
 - C) 98.0°F
 - D) 98.2°F
5. Answer key is given at the end of the Worksheets.
 6. You as Teacher can explain the logic behind the correct answer.
 7. The teacher should provide ample time for the completion of worksheet.
 8. Teacher must ensure that each student attempts all the questions.
 9. Please don't give any clue in finding out the correct answer to the question.
 10. You are advised to prepare more such sets for practice paper for the students.
 11. Teachers should keep a record of the progress of all the students and try to improve the learning outcomes.

Environmental Studies

CLASS-5

CHAPTER 1: SUPER SENSES

- Which of the following animals mark their area with their urine?**
A. Tiger, Dog
B. Cow, Buffalo
C. Elephant, Rhinoceros
D. Bear, Deer
- “I can find my female partner with my super sense of smell even if she is many kilometres away”. Who am I?**
A. Earthworm
B. Silkworm
C. Snake
D. Tapeworm
- Poachers kill wild animals illegally for their body parts. A rhinoceros is poached for its.....**
A. skin
B. tusks
C. musk
D. horn
- Riya saw ants walking in a straight line. Ants can do so as they have an amazing sense of _____.**
A. smell
B. sound
C. taste
D. sight
- Some animals sleep for a short period. Some animals sleep for a long time. Choose the correct option in which animals are arranged in the ascending order of their sleeping period.**
A. Cow, Cat, Python, Giraffe
B. Giraffe, Cow, Cat, Python
C. Cat, Cow, Python, Giraffe
D. Python, Cat, Giraffe, Cow
- Meena was eating biscuits in her garden. Some crumbs fell down. That were eaten by ants. How did ants find the biscuits?**
A. By looking
B. By touching
C. By listening
D. By smelling
- Asmi saw a movie about a bird. The bird was able to find prey from far away. Which was the bird?**
A. Sparrow
B. Eagle
C. Pigeon
D. Parrot
- Dolphins give messages to each other by using.....**
A. sound
B. smell
C. water bubbles
D. electric current

CHAPTER 2: A SNAKE CHARMER'S STORY

- How many types of poisonous snakes are found in India?**
A. 5 B. 2 C. 4 D. 3
- Most of the musical instruments used to entertain people in a *been* party are made from..... .**
A. dried pumpkin B. dried gourd
C. dried bitter gourd D. dried cucumber
- Sana went to a cultural fest with her parents where she saw a dance which had movements similar to a snake. Which of the following dances did she see?**
A. Bharatanatyam B. Kalbeliya
C. Kathak D. Kuchipudi
- The medicine for Snake bite is made from**
A. tears B. scales C. blood D. poison
- Name the organisation which works for animal welfare.**
A. PETA B. Red Cross C. WWF D. WHO
- This picture shows _____ dance.**
A. Kuchipudi
B. Kathak
C. Kalbeliya
D. Gidda
- The medicine for snake poison is available in all..... .**
A. Government schools B. Government hospitals
C. Police stations D. Post offices



Environmental Studies

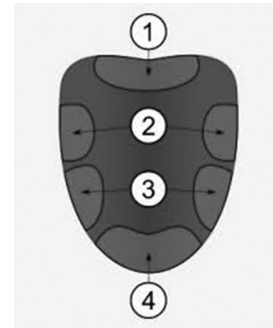
CLASS-5

CHAPTER 3: FROM TASTING TO DIGESTING

1. We can taste sweet by using our tongue.

In the given diagram of the tongue which part of the tongue tastes sweet?

- A. 1
B. 2
C. 3
D. 4



2. The digestive juices present in our stomach are _____ in nature.

- A. basic B. acidic C. neutral D. saline

3. Look at the picture.

Seema looks about three years old but her actual age is 5 years. She has very thin arms, legs and a pot belly. To make sure that she grows and develops properly, we should give her..... .

- A. balanced diet
B. lots of water
C. chips
D. lots of soft drinks



4. Rita, is suffering from vomiting and loose motions. Which of the following item should be given to her?

- A. Fruit juice B. Protein shake
C. ORS D. Milkshake

5. Joseph was feeling very tired due to long hours of practice in the playground. What should he take to get energy immediately?

- A. Ghee B. Glucose
C. Green vegetables D. Gram

CHAPTER 4: MANGOES ROUND THE YEAR

- Ravi lives in Delhi. He is going to Kochi to visit his grandma. His mother packed bread, aam papad, boiled rice and kheer. In which order should Ravi consume these food items (considering the spoilage period)?**
 - Aam Papad, Boiled Rice, Kheer, Bread
 - Kheer, Boiled Rice, Bread, Aam Papad
 - Boiled Rice, Kheer, Aam Papad, Bread
 - Kheer, Bread, Aam Papad, Boiled Rice
- Shrishti observed that bread kept in her kitchen has developed green spots. What could have happened?**
 - Bread has spoiled.
 - Plant is growing on it.
 - Someone added mint to it.
 - Bread is made of green flour.
- There is shortage of water in Ria's home. She should water her plants using_____.**
 - rain water saved in a bucket
 - water left after washing dishes
 - clean drinking water
 - soap water left after washing clothes
- Karan's mother went on a business trip. When she returned, she got 'Mamidi Tandra' for him. The state where she had gone is shaded in the map. Choose the name of this state.**
 - Himachal Pradesh
 - Madhya Pradesh
 - Andhra Pradesh
 - Uttar Pradesh
- Which of the following fruit is used for making 'Mamidi Tandra'?**
 - Orange
 - Mango
 - Papaya
 - Guava
- Garima's uncle has come from their village. He has brought lots of Green Coriander (dhania) for Garima's family. How can she keep it fresh?**
 - Keep it in a dry place
 - Boil it
 - Keep it in water
 - Wrap it in a damp cloth



CHAPTER 5: SEEDS AND SEEDS

1. Look at the given pictures. In which of the following cases will the seed germinate?

A. Seeds in water




B. Seeds in dry cotton



C. Seeds in moist cotton



D. Seeds in air



2. Where did the coffee beans originate?

A. India

B. Europe

C. America

D. Africa

3. In forests the seeds are not sown by human as is done in crop production. The seeds are spread there by..... .

A. air, water, birds

B. water, rodents, lions

C. air, giraffe, tigers

D. birds, monkeys, carnivores

4. Which of the following statements is true about seeds of different plants?

A. Seeds of all plants are of same size.

B. Seeds of all plants are of same shape.

C. All healthy seeds can germinate.

D. Seeds of all plants have two parts.

Environmental Studies

CLASS-5

CHAPTER: 6 EVERY DROP COUNTS

- There is shortage of water at a place. Which is the best container to water the plants there?
 - Bucket
 - Earth pot
 - Sprinkler
 - Pipe
- What is the wrong practice regarding water conservation?
 - After washing vegetable reuse the water.
 - Car washing with water pipe.
 - Always keep the tap off while brushing.
 - Reuse the RO's waste water for plants.
- Look at the map. The state in which Ghadsisar lake is located, is marked as 'X'. Identify the state.
 - Rajasthan
 - Maharashtra
 - Kerala
 - Orissa
- Which of the following is wrong about rain water harvesting?
 - Collect the water
 - Reuse the water
 - Increase the underground water level
 - Purify water



CHAPTER 7: EXPERIMENTS WITH WATER

- Find out the substance which is insoluble in water.
 - Lemon juice
 - Milk
 - Oil
 - Common salt


2. **What happens when a flat sheet (Aluminium foil) and foil crumbled into a ball, are dropped into a bucket of water?**
- A. Flat sheet sinks and ball of aluminium foil floats.
 - B. Flat sheet floats and ball sinks.
 - C. Both will float.
 - D. Both will sink.
3. **Sugar will dissolve faster in:**
- A. Hot water
 - B. Cold water
 - C. Sea water
 - D. Normal tap water
4. **Find the pair which will float in water.**
- A. Iron Nail, Feather
 - B. Feather, Stone
 - C. Thermocol, Paper Boat
 - D. Bottle Cap, Pin

CHAPTER 8: A TREAT FOR MOSQUITOES

1. **My neighbour Meena is not feeling well. She has high fever, muscles and joint pain, skin rashes and headache. She is suffering from _____.**
- A. malaria
 - B. chickunguniya
 - C. dengue
 - D. typhoid
2. **Which mosquito bite causes malaria?**
- A. Aedes aegypti
 - B. Aedes albopictus
 - C. Female anopheles
 - D. Mansonia
3. **How do you prevent mosquitoes from breeding?**
- A. By covering mouth while sneezing
 - B. By spraying kerosene on standing water
 - C. By wearing half sleeve shirt
 - D. By washing hands regularly
4. **The _____ of the cinchona tree is used to make a medicine to treat malaria?**
- A. bark
 - B. leaves
 - c. root
 - d. flower
5. **Gungun is a 12 years old anaemic girl. The doctor has told her to eat iron rich food such as _____.**
- A. nuts
 - B. spinach
 - C. egg
 - D. potato

6. A _____ is needed to find out if a person has anaemia.
A. blood test B. X-ray C. urine-test D. skin test

7.



The above pictures tell us ways to prevent _____ breeding.

- A. cockroaches B. flies C. mosquitoes D. honey bees

Environmental Studies

CLASS-5

CHAPTER 9: UP YOU GO

1. **Which items are given for strength and to keep warm in the cold during mountaineering?**
 - A. Vitamin A tablets, Calcium tablets and Cold Milk
 - B. Vitamin C tablets, Iron tablets and Hot Milk
 - C. Vitamin B tablets, Vitamin D tablets and Juice
 - D. Vitamin A tablets, Vitamin E tablets and Soup
2. **A big responsibility of a group leader during mountaineering is to:**
 - A. Help those group members who cannot climb properly
 - B. Leave behind the members
 - C. Motivate group to climb without ropes
 - D. Arrange money for their travelling
3. **Why a double layered plastic sheet is used for making tent during mountaineering?**
 - A. To strengthen the tent quality
 - B. Air between the tent layer help to keep mountaineers warm
 - C. To make the tent light weight
 - D. To make the tent beautiful
4. **Which of the following cylinder is carried by mountaineers to help in breathing?**

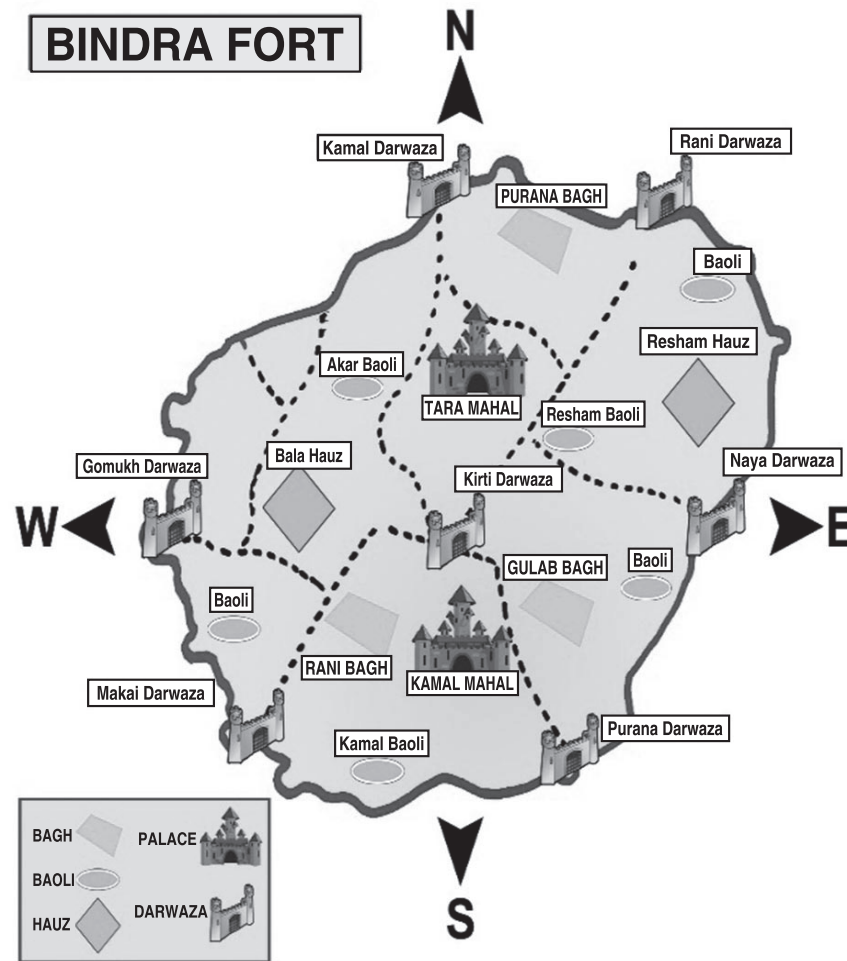
A. Carbondioxide Cylinder	B. Oxygen Cylinder
C. Hydrogen Cylinder	D. Nitrogen Cylinder
5. **Pitons and Slings are useful tools for _____.**

A. dancing	B. skating
C. mountaineering	D. skeepng

CHAPTER 10: WALL TELLS STORIES

- 1. The Golconda fort was built during _____.**
A. Lodhi dynasty B. Khilji dynasty
C. Tughlaq dynasty D. Kakatiya dynasty
- 2. The cutting of stone or wood to form a design is known as :**
A. Painting B. Drawing C. Carving D. Engraving
- 3. What is the meaning of a canon?**
A. Big gun B. Toy gun
C. Drum D. A type of sword
- 4. Which part of the fort is called Burj?**
A. Tomb B. Bastions C. Gateway D. Walls
- 5. A big gun used to guard the Forts is known as _____.**
A. rifle B. tank C. cannon D. sword
- 6. The tools used for carving the stones by a craftsman are:**
A. Sword and knife B. Axe and hammer
C. Chisel and hammer D. Hacksaw and mallet

Nirav was reading a storybook. In this book, he saw the following map of Bindra Fort.



Observe the map carefully and answer questions 7-13. (The name of fort is imaginary and map is unscaled).

7. How many gates do you see on the outer walls of the fort?
 A. 8 B. 7 C. 9 D. 6
8. How many Baolis are there in the fort?
 A. 5 B. 4 C. 7 D. 6
9. How many palaces are there in the fort?
 A. 2 B. 3 C. 1 D. 4
10. If you enter from Purana Darwaza, in which direction from you is Akar Baoli?
 A. East B. West C. North D. South

Environmental Studies

CLASS-5

CHAPTER 11: SUNITA IN SPACE

1. **The earth will appear from space:**
A. Flat B. Cylindrical C. Spherical D. Circular
2. **The biggest challenge for astronauts while being in space is:**
A. Performing routine activities
B. Facing meteorites
C. Dealing with loneliness
D. Talking with fellow astronauts
3. **While travelling in space, Sunita's hair was standing because**
A. she never combed her hair.
B. she was afraid of being in space.
C. there was no oxygen in the space.
D. there was no gravity or pull.
4. **Which of the following activity can you perform in a spaceship?**
A. Take proper food on dining table.
B. Drink water in a glass.
C. Play with a ball.
D. Walk straight.
5. **Sunita Williams wash her face in space by:**
A. Turning the bottle upside down
B. Catching blobs of water and wetting paper with them
C. Using liquid soap
D. Using a bucket

6. Rahul enjoys observing the night sky daily from his terrace. One day he observes that the sky was full of only twinkling stars and moon was nowhere to be seen. How will the sky appear on 15th day?



7. Nisha observes that the globe has lines and divisions on it, what do you think how earth would appear from the space?

- A. The earth will have lines dividing the countries.
- B. Land and sea will be visible.
- C. Different countries will be of different colours.
- D. Only sea will be visible clearly.

CHAPTER 12: WHAT IF IT FINISHES?

1. Amongst the following select the most environment friendly fuel.

- A. CNG
- B. Petrol
- C. Coal
- D. Diesel

2. A smelly thick and dark liquid known as petroleum is pumped up from the earth. Where is it cleaned?

- A. Factory
- B. Petrol pump
- C. Refinery
- D. CNG Station

3. Which fuel was commonly used for cooking in rural India?

- A. Petrol
- B. LPG
- C. Diesel
- D. Cow dung cakes


4. We need to save fuels because

- A. it is not available in India.
- B. there is no need to save fuels.
- C. fuels' deposits are limited and takes longer time to regenerate.
- D. fuels' deposits are unlimited and takes longer time to regenerate.

5. Which one is being used for making plastic and paints?

- A. Petroleum B. Coal C. Wax D. LPG

Look at the poster carefully and answer question 6 & 7.



Petrol and diesel will not last forever. Save it for your children.


Make every drop go a long way.

Switch off the engine when you stop the car.

Date 13-07-2017

Rate

Petrol :	₹ 64.91 per litre
Diesel:	₹ 54.70 per litre



6. It says petrol is not going to last forever. It is so, because


- A. it will get evaporated. B. its deposits are limited.
C. it is very costly. D. it gets burn automatically.

7. What message does this poster convey?

- A. Petrol is costly B. Save water
C. Use more petrol D. Save Petrol

8. To save petrol, we should _____.

- A. sound horn
B. switch off engine of vehicle at red light
C. keep engine of vehicle switch on always
D. wash the car daily



Environmental Studies

CLASS-5

CHAPTER 13: A SHELTER SO HIGH

- What kind of climate do you find in a cold desert?**
 - Cold and wet
 - Cold and humid
 - Hot and dry
 - Cold and dry
- Which kind of vegetation do you find in a cold desert like Leh in India?**
 - Grass
 - Mangrove
 - Evergreen trees
 - Deciduous trees
- Changpa tribe gets Pashmina wool from _____.**
 - sheep
 - camel
 - goat
 - yak
- One of the tribes of India is famous for rearing Changthangi goats to get pashmina wool. Name of this tribe is:**
 - Toda
 - Changpa
 - Chenchu
 - Jarwa
- Goats reared at high altitude in cold deserts have _____ fur.**
 - thicker
 - thinner
 - softer
 - harder
- The houses with sloping roofs are found in _____.**
 - desert areas
 - hilly areas
 - planes
 - coastal areas
- The nomadic Changpas live in _____ called Rebo.**
 - cone shaped tents
 - igloo
 - house boats
 - stilt houses
- A person from Delhi, goes to Leh hills. He has difficulty in breathing because of :**
 - High oxygen level
 - Low oxygen level
 - Slant slopes
 - Extreme cold

CHAPTER 14. WHEN THE EARTH SHOOK!

1. **What happens during an earthquake?**
 - A. Rains heavily
 - B. Earth shakes
 - C. Storms arise
 - D. Clouds burst
2. **Who help us in designing earthquake resistant houses?**
 - A. Mason
 - B. Engineers
 - C. Contractors
 - D. Plumber
3. **How will you save yourself during an earthquake?**
 - A. Gather in one room
 - B. Go to different rooms
 - C. Rush to open space
 - D. Cover the body with blanket
4. **By building earth quake resistant houses _____ .**
 - A. damage can be minimised
 - B. earthquake can be stopped
 - C. earthquake can be minimised
 - D. damage can be eliminated
5. **An instrument used to measure the intensity of earthquake is called _____ .**
 - A. crescograph
 - B. telegraph
 - C. seismograph
 - D. microscope
6. **Which of the following agencies help people in an earthquake hit area first?**
 - A. Bank
 - B. Hospital
 - C. Post office
 - D. Railway
7. **The main cause of drought is _____ .**
 - A. dry winds
 - B. low humidity
 - C. heavy rainfall
 - D. scanty rainfall

Environmental Studies

CLASS-5

CHAPTER 15: BELOW HOT BELOW HOT

- During breaths in chest _____.
 - expands
 - contracts
 - vibrates
 - remains same
- Which of the following music instrument is based on vibration in air?
 - Guitar
 - Dholak



C. Veena

D. Violin



- Hot air moves _____ while cold air moves _____.
 - downwards, upwards
 - upwards, upwards
 - downwards, downwards
 - upwards, downwards
- Raman is climbing stairs fast, his _____.
 - heartbeat and breathing both will increase.
 - heartbeat and breathing both will decrease.
 - heart beat will increase but not the breathing.
 - breathing will increase but not the heartbeat.

5. During exercise and physical work, our need of oxygen _____.

- A. decreases
- B. increases
- C. remains same
- D. becomes irregular

6. Which instrument blows cold air?

- A. Guitar
- B. Sitar



- C. Violin



- D. Flute



7. A doctor listens to your heartbeat using :

- A. Telescope
- B. Microscope



- C. Stethoscope



- D. Thermometer



8. In winters, the surface of spectacles becomes hazy due to presence of _____ in air.

- A. carbon dioxide B. dust particles
- C. oxygen D. moisture



CHAPTER 16: WHO WILL DO THIS WORK?

1. 'All work are equally valuable'. It means:
 - A. Same wages for all kinds of jobs.
 - B. Different people do all work themselves.
 - C. All work bear equal importance.
 - D. Different wages for all kinds of jobs
2. Discrimination based on work is a _____ issue.
 - A. natural B. social C. legal D. financial
3. In past (not presently) the occupation was directly related to _____.
 - A. religion B. year of birth
 - C. caste D. colour of skin
4. 'Open-defecation free' campaign is related to _____.
 - A. construction of toilets
 - B. construction of houses
 - C. construction of common bathrooms
 - D. construction of community houses
5. Gandhiji and his team started doing the job of cleaning because _____.
 - A. they were fond of doing cleaning job.
 - B. they viewed all works with equal respect.
 - C. they could earn more respect from the cleaning job.
 - D. nobody else was ready to do cleaning job.
6. In recent years it was reported in news that a few safai karamcharis died while cleaning sewers. The reason of their death is _____.
 - A. drowning in gutters B. suffocation
 - C. falling of garbage D. cold
7. In Richa's house theft has taken place. Where will she go to report it?
 - A. Police Station B. Post office
 - C. Bank D. Hospital

Environmental Studies

CLASS-5

CHAPTER 17: ACROSS THE WALL

- Our National game is:**
A. Cricket B. Volleyball C. Basket Ball D. Hockey
- Afreen's brother was playing cricket with his friends. Afreen also wanted to play but her grandmother said "cricket is only for boys". Choose the correct statement in this situation in present day context.**
A. Girls should not play cricket.
B. Girls can get hurt.
C. Both girls and boys can play cricket.
D. Cricket is not a game for girls.
- Choose the correct statements:**
 - Girls and boys have equal rights.**
 - Boys have higher social status in the society.**
 - Boys and girls both have equal respect in a modern society.**A. 1 and 2 B. 2 and 3 C. 1 and 3 D. 1 only
- Girls and boys should get equal opportunities in _____.**
A. games B. home C. school D. every field

CHAPTER 18: NO PLACE FOR US

- The main occupation of the villagers is:**
A. Farming B. Stitching
C. Painting D. Construction
- Dams on the rivers are constructed for _____.**
A. providing shelter B. prevent earthquakes
C. producing electricity D. developing forests

3. **Jenny is living in a village with her family. This year there was a famine in her village due to which there was no work. What should Jenny's family do?**
 - A. Wait for help from the government.
 - B. Wait for the famine to end.
 - C. Dig a well.
 - D. Migrate to the nearby place for work.
4. **People migrate from villages to city _____.**
 - A. for a peaceful and calm life
 - B. for better future and livelihood
 - C. to be closer to nature
 - D. to do farming
5. **Rehan's family has migrated to the city recently. Choose the correct statement about cities.**
 - A. City is more crowded than village.
 - B. City has fruit giving trees on the roads.
 - C. Water supply is abundant in city.
 - D. Transport facility is not present in the city.
6. **Which of the following situation is created due to building of dams on the rivers?**
 - A. Growing of big cities nearby
 - B. Growing of crops all around
 - C. Establishment of medicine factories
 - D. Displacement of people living there

CHAPTER 19: A SEED TELLS A FARMER'S STORY

1. **See the pictures and arrange them in order:**



- A. 1, 2, 3, 4
- B. 2, 3, 4, 1
- C. 3, 4, 1, 2
- D. 4, 1, 2, 3

- 2. How can Bajra flour be made from seeds?**
- A. By kneading seeds in dough B. By grinding seeds in chakki
C. By soaking seeds in water D. By sieving seeds
- 3. A farmer has grown cotton in his fields and his family wants to make cloth. They spin cotton _____.**
- A. using charkha B. using rahat
C. using kolhu D. using chakki
- 4. The crops are protected from diseases _____.**
- A. by sowing new seeds. B. by spraying medicines.
C. by adding fertilizers to the field. D. by using tractor for ploughing.
- 5. Earthworm is called the friend of farmers because _____.**
- A. it erodes weeds. B. it kills the rodents.
C. it helps in sowing. D. it improves fertility of soil.

Environmental Studies

CLASS-5

CHAPTER 20: WHOSE FORESTS?

1. Jharkhand is located in _____ direction in the map of India.

- A. North
- B. South
- C. East
- D. West

2. Which of the following is true about Jhoom farming :

- A. Land is immediately ploughed.
- B. Seeds are immediately dropped on it.
- C. Land is left as it is for some years.
- D. Remove weeds and other unwanted plants immediately.

3. What kind of climate is there on mountains?

- A. Cold and dry
- B. Cold and humid
- C. Warm and dry
- D. Warm and humid

4. Rakesh saw the following pictures in the photo album. Which State/UT it can be?



- | | |
|--------------------|--------------|
| A. Jammu & Kashmir | B. Delhi |
| C. Tamilnadu | D. Rajasthan |



5. **Rabia wants to see snow during her winter vacation.**

From the following places, where can she visit?

A. Beach



B. Laddakh Mountains



C. Desert



D. River



6. **Among the following who was the first women to climb the Everest?**

A. Kiran Bedi

B. Bachhendri Pal

C. Sania Mirza

D. Mary Kom

CHAPTER 21: LIKE FATHER LIKE DAUGHTER

1. **My sister looks like my aunt. This is one of the _____ traits.**

A. acquired

B. family trait

C. learnt from peers

D. learned through play

2. **Which of the following traits is different from other traits given below?**

A. Colour of eyes

B. Colour of skin

C. Colour of hair

D. Bent back bone

3. **Geeta and Neeta are identical twins brought up in different places. How can they be differentiated?**

A. Colour of eyes

B. Language

C. Colour of skin

D. Height

4. **The tail of the mouse is cut accidentally, which of the following will be true about next generation?**

A. Next generations will have longer tail than usual.

B. Next generations will have shorter tail than usual.

C. Next generations will not have tail any more.

D. Next generations will have tail as usual.

5. **One of my friend is affected by polio. What will happen to the his offsprings (Sons & Daughters) ?**
- A. Son will be affected by polio.
 - B. Daughter will be affected by polio.
 - C. Both Son & Daughters will be affected by polio.
 - D. None of the offsprings will be affected by polio.
6. **'Do Boond Zindagi Ki'(Two Drops of Life) slogan is related to eradication of:**
- A. T.B.(Tuberculosis)
 - B. Polio
 - C. Malaria
 - D. Cancer

CHAPTER 22: ON THE MOVE AGAIN

1. **Ramesh is a farmer who works in the fields for his livelihood and needs money to buy seeds, and farm equipments. From whom can he borrow the money?**
- A. Gram Panchayat
 - B. Post office
 - C. Bank
 - D. Shopkeeper
2. **What would you suggest to a person addicted to drug?**
- A. Counselling
 - B. Stop talking
 - C. Ignoring
 - D. Separating
3. **Identify the method of irrigation in an area where rain is less.**
- A. Flood
 - B. Sprinkler
 - C. Shallow well
 - D. Pump

Environmental Studies

CLASS-5

MISCELLANEOUS

1. Sheena observes people writing their names on the wall of monuments.

She is upset because _____.

- A. monuments are getting spoiled.
- B. no place left for her to write.
- C. people will get prize but she will not.
- D. guard will catch her.



2. Vishal visited a place where historical items like swords, jewellery, pots etc. were displayed. Which place did he visit?

- A. Museum
- B. School
- C. Hospital
- D. Post office

3. It is _____ to put birds and animals in cages.

- A. good
- B. fun
- C. cruelty
- D. necessity



4. Out of the following activities, choose the one that can help in conservation of water:

- A. Bathing with a shower
- B. Washing vehicles with running water



C. Brushing teeth with open tap



D. Watering plants with waste water from R.O



5. If you switch off the engine of your car on a red light, what will happen?

- A. It will make us late for our journey.
- B. More fuel will be used.
- C. Fuel will be saved.
- D. It will generate more pollution.

6. There are different types of houses in different regions as shown in figure. The type of house depends mostly upon:

- A. Climate
- B. Occupation
- C. Availability of water
- D. Height of people



7. People in Leh keep their sheeps and goats in _____.

- A. rebo
- B. igloo
- C. lekha
- D. stable

8. People live together in neighbourhood for :

- A. Wedding
- B. Competition
- C. Cooperation
- D. Conflict

9. During a famine there is a shortage of..... .

- A. food
- B. fresh air
- A. medicines
- B. sea water

10. What will happen if a nearby forest is cleared?

- A. Animals will lose their shelter.
- B. Pollution will decrease.
- C. Oxygen level will increase.
- D. Availability of food for wild animals will increase.

11. **Forests are considered important for adivasies because _____.**

1. they provide medicine and food.
2. they provide shelter and raw materials.
3. they put no burden of education on them.

Choose the correct option

- A. 1 And 2 B. 2 and 3 C. 1 only D. 3 only

12. **Rekha read about Chipko movement in her Environmental Studies class. What is it related to?**

- A. Saving tribals B. Saving animals
C. Saving rivers D. Saving trees

13. **Chandrapal an adivasi, wants to make a bamboo basket. From where can he arrange the raw material?**

- A. Market B. Forest
C. Home D. Government office

14. **You would have seen many people doing different work. What work does a mason do?**

- A. Collects garbage B. Keeps the house clean
C. Mends the shoes D. Built a house

15. **“Swachh Bharat Abhiyan” was started on birth anniversary of _____.**

- A. Raja Ram Mohan Roy B. Mahatma Gandhi
C. Subhash Chandra Bose D. Dr. Rajendra Prasad

Environmental Studies

CLASS-5

ANSWER KEY

Questions	1	2	3	4	5	6	7	8	9	10
Worksheet 1										
CHAPTER 1	A	B	D	A	B	D	B	A		
CHAPTER 2	C	B	B	D	A	C	B			
Worksheet 2										
CHAPTER 3	D	B	A	C	B					
CHAPTER 4	B	A	A	C	B	D				
CHAPTER 5	C	D	A	C						
Worksheet 3										
CHAPTER 6	C	B	A	D						
CHAPTER 7	C	B	A	C						
CHAPTER 8	B	C	B	A	B	A	C			
Worksheet 4										
CHAPTER 9	B	A	B	B	C					
CHAPTER 10	D	C	A	B	C	C	D	D	A	C
Worksheet 5										
CHAPTER 11	C	A	D	C	B	D	B			
CHAPTER 12	A	C	D	C	A	B	D	B		
Worksheet 6										
CHAPTER 13	D	A	C	B	C	B	A	B		
CHAPTER 14	B	B	C	A	C	B	D			

Worksheet 7																			
CHAPTER 15	A	B	D	A	B	D	C	D											
CHAPTER 16	C	B	C	A	B	B	A												
Worksheet 8																			
CHAPTER 17	D	C	C	D															
CHAPTER 18	A	C	D	B	A	D													
CHAPTER 19	C	B	A	B	D														
Worksheet 9																			
CHAPTER 20	C	C	A	A	B	B													
CHAPTER 21	B	D	B	D	D	B													
CHAPTER 22	C	A	B																
Worksheet 10																			
1.	A	2.	A	3.	C	4.	D	5.	C	6.	A	7.	C	8.	C	9.	A	10.	A
11.	A	12.	D	13.	B	14.	D	15.	B										