

Directorate of Education, GNCT of Delhi
Mid Term Practice Question Paper
(Session-2025 -26)

Class: III
Duration: 2 hours

Subject: Environmental Science (EVS)
Maximum Marks: 50

General Instructions:

1. All questions are compulsory.
 2. There are three sections viz. Section -A, section- B and Section-C.
 3. The number of marks carried by each question is indicated against it.
-

Section- A

1. Read the information given below and answer the questions - $2 \times 5 = 10$

Reema's mother is cooking food. There are some vegetables, grains and pulses in the basket like Pumpkin, mango, apple, banana, grapes, tomato, green coriander, sugar cane, jack fruit, snake gourd, brinjal, rice, arhar dal etc.

- i. Reema looked at the coriander. Its stem is soft. What kind of a plant is it?
a. Tree b. Herb c. Shrub d. Grass

- ii. Reema's mother asked her to bring some curry leaves from the garden. Curry leaves plant is medium-sized plants with several woody stems and branches growing close to the ground. What kind of a plant is it?
a. Shrub b. Herb c. Grass d. Creeper

- iii. Which vegetable we get from trees?
a. Pumpkin b. Brinjal c. Jack fruit d. Snake gourd

- iv. Pointing to one thing her mother said, "This is a type of grass. Sugar is made from it." What is this thing.
a. Paddy b. Wheat c. Bamboo d. Sugar cane

- v. Which of the following fruits, we get from climbers?
a. Mango b. Apple c. Banana d. Grapes

2. Answer these questions in one word-

$1 \times 5 = 5$

i. Write name of one animal that gives us milk?

ii. Write name of one animal that lives in soil?

iii. Write name of one festival that is celebrated in spring season?






iv. Which vehicle is used to carry sick and hurt people to the hospital?

v. Write name of one thing that can be used to make rangoli?

Sections- B

3. Match the picture with related words

1 × 5 = 5

i.		a.	Police officer
ii.		b.	Firefighter
iii.		c.	Halwai/Confectioner
iv.		d.	Volunteers
v.		e.	Medical attendants

4. Encircle the odd one out-

1 × 5 = 5

- i. Spring, Winter, Sunny, Summer
- ii. Neighbour, Brother, Sister, Mother
- iii. Bihu, Holi, Sunday, Christmas
- iv. Wheat, Tomato, Bajra, Ragi
- v. Lotus, Rose, Jasmine, Money Plant

5. True or false

1 × 5 = 5

- i. We should help our elders in their everyday work. ()
- ii. Putting our hands out of the window of a moving bus may be harmful. ()
- iii. 'Vishu' festival is celebrated in Kashmir. ()
- iv. In the monsoons, you may find many more plants and animals around. ()
- v. Animals depend on plants for food and shelter. ()

Section- C

6. When it rains and the soil is wet, why many more insects can be seen on the ground?

OR

How squirrels and monkeys depend upon trees?

4

7. How do we look after plants and animals in our surroundings?

4







OR

Write the following things about any one animal or bird you have seen in your surroundings.

i. Name of the animal or bird	_____
ii. What sounds does it make?	_____
iii. Where does it live?	_____
iv. What does it eat?	_____

8. What these road signboards mean-

6

i.		_____
ii.		_____
iii.		_____
iv.		_____
v.		_____
vi.		_____

OR

Draw and label any three road signboards that are not listed above.

--	--	--

9. Complete the table-

6

<u>Family Member</u>	<u>What you have learnt from them</u>
Grandfather	
Grandmother	
Father	
Mother	
Brother/Sister	
Uncle/Aunt	

OR

i. How do you play chhupan-chhupai (hide and seek)?

ii. Where do you play this game?

iii. With whom do you play this game?
