

Directorate of Education, GNCT of Delhi

Practice Question Paper

(Annual Examination:2025 -26)

Class: IV
Duration: 2 hours

Subject: Environmental Studies (EVS)
Maximum Marks:50

General Instructions:

1. All questions are compulsory.
 2. There are three sections viz. Section -A, section- B and Section-C.
 3. The number of marks carried by each question is indicated against it.
-

Section- A

1. Read the paragraph carefully- (2×5=10)

Today was a special day in Assam. The new rice crop had been harvested. The village was celebrating the festival of *Bihu*. The four friends sang and chanted happily as they made the *Bhela Ghar* from bamboo.

Now encircle the answers of the questions-

- (i) In which state of India is the festival of Bihu celebrated?

a. Bihar b. Assam c. Kerala d. Punjab

- (ii) Which one of these festivals is a harvest festival?

a. Diwali b. Eid c. Christmas d. Bihu

- (iii) Which of the following is a special dish cooked on Bihu festival?

a. Cheva Rice b. Khichdi c. Pulav d. Thekua

- (iv) Write name of any one material that is used to make The Bhela Ghar?

a. Cement b. Iron c. Bamboo d. Glass

- (v) What is the 'cooking and eating together' in a Gurudwara called?

a. Langar b. Lunch c. Dinner d. Snacks

2. Answer these questions in one word-

(1×5=5)



i. Write name of the plant in the picture?

ii. In which state of India, the Pochampalli sarees are made?

iii. Write name of any one job in which people need to wear uniforms.

iv. What is the name of the capital city of United Arab Emirates (UAE)?

v. Write name of any one tree which grows in Kerala?






Section-B

3. Which of these things listed below grow? Underline any five.

(1×5=5)

Plant	Table	Hair	Pencil	Leaves	Baby
Coin	Plate	Puppy	Doll	Nails	Scooter

4. Match the pictures of the birds with their names- (1×5=5)

i.		a.	Crow
ii.		b.	Dove
iii.		c.	Koel
iv.		d.	Barbet
v.		e.	Indian Robin

5. Complete the table by writing the names of - (1×5=5)

Cucumber Grapes Ginger coriander leaves Pineapple

Fruits and vegetables that spoil quickly	Fruits and vegetables that can stay for some days
i. Tomato	a. Potato
ii. _____	b. _____
iii. Banana	c. _____
iv. _____	d. Onion
v. Spinach	e. _____

Section- C

6. Write names of any two activities that you enjoy doing in school? (4)

7. What are the three parts of Indian defence services? (4)

Which part of the Indian defence services Dr. Wahida belongs to?

OR

What is the meaning of the word 'Prism' in Wahida's name?

8. When a person has diarrhoea and vomiting, what things should they do? Write about any three things. (6)

OR

In your home, there is some water that is not good for drinking. Can this water be used for something else? Write about any three things.

9. Write any three differences between the houses where Mama lived and the houses in the high-rise buildings? (6)

	House where Mama lived	Houses in the high-rise buildings
(i)		
(ii)		
(iii)		

OR

In what ways did Nandita find her Mama's house to be different from her house in the village? Write any three differences.

	Mama's house	Nandita's house in the village
(i)		
(ii)		
(iii)		